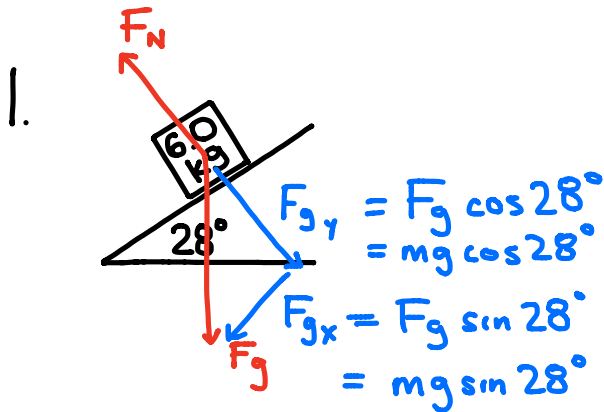


FORCES AT ANGLES - SOLUTIONS



$$F_{NET} = ma$$

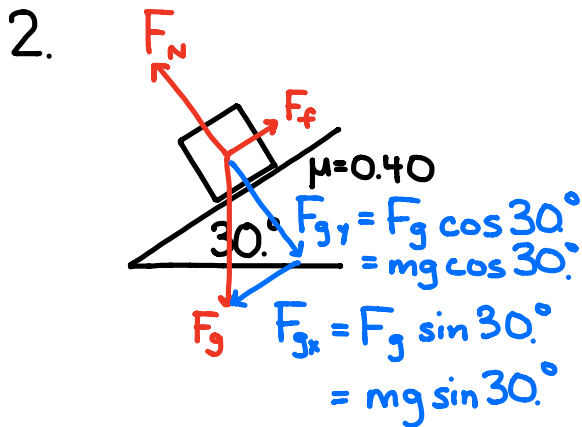
$$F_{g_x} = ma$$

$$\cancel{mg \sin 28^\circ} = \cancel{ma}$$

$$a = g \sin 28^\circ$$

$$= 9.8 \sin 28^\circ$$

$$= 4.6 \frac{m}{s^2} \text{ DOWN THE RAMP}$$



$$F_N = F_{g_y}$$

$$= mg \cos 30^\circ$$

$$F_{NET} = ma$$

$$F_{g_x} - F_f = ma$$

$$mg \sin 30^\circ - \mu F_N = ma$$

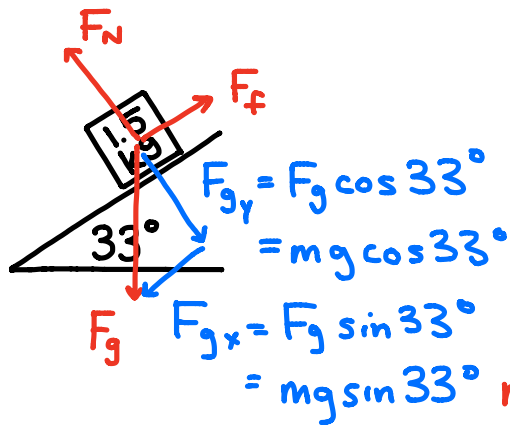
$$\cancel{mg \sin 30^\circ} - \mu \cancel{mg \cos 30^\circ} = \cancel{ma}$$

$$a = g (\sin 30^\circ - \mu \cos 30^\circ)$$

$$= 9.8 (\sin 30^\circ - 0.40 \cos 30^\circ)$$

$$= 1.5 \frac{m}{s^2} \text{ DOWN THE RAMP}$$

3.



$$F_N = F_{g_y} = mg \cos 33^\circ$$

$$F_{g_x} - F_f = ma$$

$$mg \sin 33^\circ - \mu F_N = ma$$

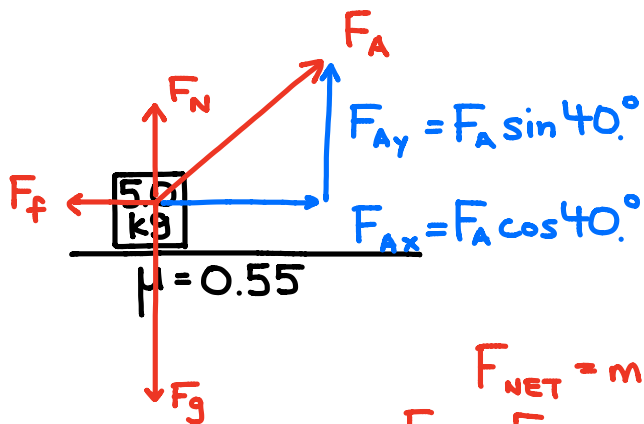
$$\cancel{mg} \sin 33^\circ - \mu \cancel{mg} \cos 33^\circ = \cancel{m} a$$

$$\mu = \frac{g \sin 33^\circ - a}{g \cos 33^\circ}$$

$$= \frac{9.8 \sin 33^\circ - 3.0}{9.8 \cos 33^\circ}$$

$$= 0.28$$

4.



$$F_N + F_{A_y} = F_g$$

$$F_N = F_g - F_{A_y} = mg - F_A \sin 40^\circ$$

$$F_{NET} = ma$$

$$F_{A_x} - F_f = ma$$

$$F_A \cos 40^\circ - \mu F_N = ma$$

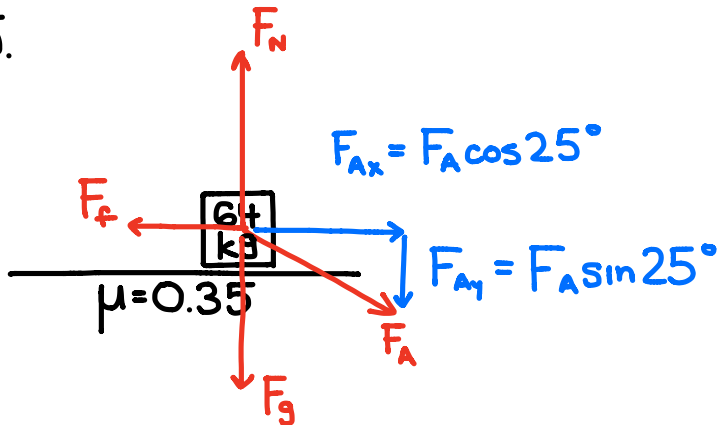
$$F_A \cos 40^\circ - \mu (mg - F_A \sin 40^\circ) = ma$$

$$a = \frac{F_A \cos 40^\circ - \mu (mg - F_A \sin 40^\circ)}{m}$$

$$= \frac{45 \cos 40^\circ - 0.55 [(5.0)(9.8) - 45 \sin 40^\circ]}{5.0}$$

$$= 4.7 \frac{\text{m}}{\text{s}^2} \text{ RIGHT}$$

5.



$$F_N = F_g + F_{Ay}$$

$$= mg + F_A \sin 25^\circ$$

$$F_{NET} = ma$$

$$F_{Ax} - F_f = ma$$

$$F_A \cos 25^\circ - \mu F_N = ma$$

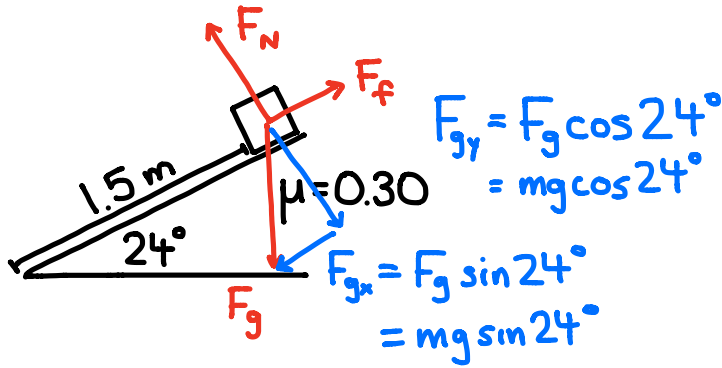
$$F_A \cos 25^\circ - \mu (mg + F_A \sin 25^\circ) = ma$$

$$a = \frac{F_A \cos 25^\circ - \mu (mg + F_A \sin 25^\circ)}{m}$$

$$= \frac{450 \cos 25^\circ - 0.35 [(64)(9.8) + 450 \sin 25^\circ]}{64}$$

$$= 1.9 \frac{\text{m}}{\text{s}^2} \text{ RIGHT}$$

6.



$$F_N = F_{gy} = mg \cos 24^\circ$$

$$F_{NET} = ma$$

$$F_{gx} - F_f = ma$$

$$mg \sin 24^\circ - \mu F_N = ma$$

$$\cancel{mg \sin 24^\circ} - \mu \cancel{mg \cos 24^\circ} = \cancel{ma}$$

$$a = g(\sin 24^\circ - \mu \cos 24^\circ)$$

$$= 9.8(\sin 24^\circ - 0.30 \cos 24^\circ)$$

$$= 1.3002 \frac{m}{s^2}$$

GIVEN:

$$a = 1.3002 \frac{m}{s^2}$$

$$d = 1.5 \text{ m}$$

$$v_i = 0$$

$$t = ?$$

$$d = v_i t + \frac{1}{2} a t^2$$

$$d = \frac{1}{2} a t^2$$

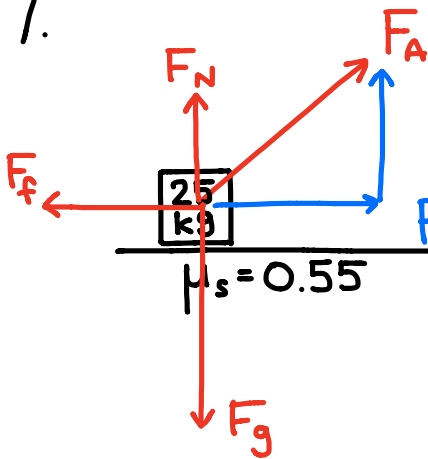
$$t^2 = \frac{2d}{a}$$

$$t = \sqrt{\frac{2d}{a}}$$

$$= \sqrt{\frac{2(1.5)}{1.3002}}$$

$$= 1.5 \text{ s}$$

7.



$$F_{Ay} = F_A \sin 35^\circ$$

$$F_{Ax} = F_A \cos 35^\circ$$

$$F_N + F_{Ay} = F_g$$

$$F_N = F_g - F_{Ay} \\ = mg - F_A \sin 45^\circ$$

$a = 0$ (MINIMUM FORCE)

$$F_{NET} = ma$$

$$F_{Ax} - F_f = 0$$

$$F_A \cos 35^\circ - \mu F_N = 0$$

$$F_A \cos 35^\circ - \mu (mg - F_A \sin 35^\circ) = 0$$

$$F_A \cos 35^\circ - \mu mg + \mu F_A \sin 35^\circ = 0$$

$$F_A \cos 35^\circ + \mu F_A \sin 35^\circ = \mu mg$$

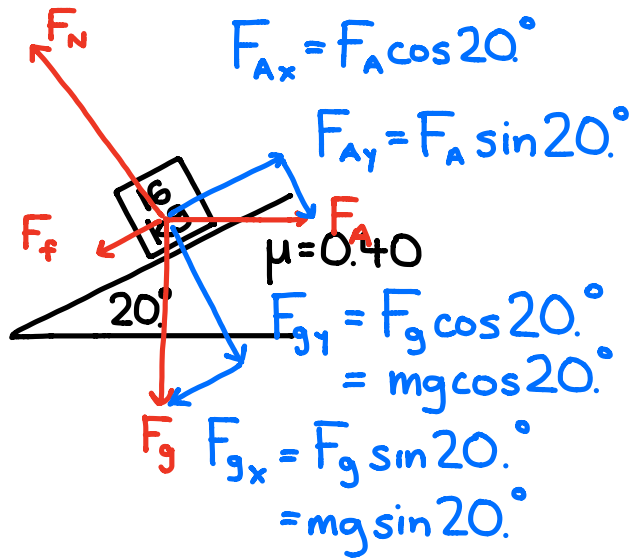
$$F_A (\cos 35^\circ + \mu \sin 35^\circ) = \mu mg$$

$$F_A = \frac{\mu mg}{\cos 35^\circ + \mu \sin 35^\circ}$$

$$= \frac{(0.55)(25)(9.8)}{\cos 35^\circ + 0.55 \sin 35^\circ}$$

$$= 120 \text{ N}$$

8.



$$F_N = F_{gy} + F_{Ay}$$

$$= mg \cos 20^\circ + F_A \sin 20^\circ$$

$$F_{NET} = ma$$

$$F_{Ax} - F_{gx} - F_f = ma$$

$$F_A \cos 20^\circ - mg \sin 20^\circ - \mu F_N = ma$$

$$F_A \cos 20^\circ - mg \sin 20^\circ - \mu (mg \cos 20^\circ + F_A \sin 20^\circ) = ma$$

$$a = \frac{F_A \cos 20^\circ - mg \sin 20^\circ - \mu (mg \cos 20^\circ + F_A \sin 20^\circ)}{m}$$

$$= \frac{150 \cos 20^\circ - (16)(9.8) \sin 20^\circ - 0.40 [(16)(9.8) \cos 20^\circ + 150 \sin 20^\circ]}{16}$$

$$= 0.49 \frac{m}{s^2} \text{ UP THE RAMP}$$